





Download How Many Lines Of Symmetry Does An Isosceles Trapezoid Have

A trapezium doesn't have rotational symmetry so the order of rotational symmetry is 1. You can work out the area of a trapezium by using the formula $A = \frac{1}{2}(a+b)h$. Where a and b are the lengths of the parallel sides and h is the shortest distance between the two parallel sides.

How Many Lines of Symmetry Does an Isosceles Trapezoid Have? An isosceles trapezoid contains a single line of symmetry. A trapezoid is referred to as an isosceles trapezoid when its two non-parallel edges are equal in length.

It depends on how the trapezoid is shaped.  If it's like this, it would have 1 line of symmetry going vertically.  This trapezoid would have no lines of symmetry.

Isosceles Trapezoid. a quadrilateral with a line of symmetry bisecting one pair of congruent sides. Rhombus. A parallelogram with opposite equal acute and obtuse angles and four equal sides. Kite. A quadrilateral with two distinct pairs of equal adjacent sides. Parallelogram. A quadrilateral with both pairs of opposite sides parallel. How many lines of symmetry does a Kite have? ONE. How many ...

It depends on how the trapezoid is shaped.  If it's like this, it would have 1 line of symmetry going vertically.  This trapezoid would have no lines of symmetry.

It can have 2 right angles but normally none unless it is an isosceles trapezoid in which case it will have 2 pairs of congruent base angles

Normally none but in the form of an isosceles trapezoid its 2 non-parallel sides are of the same lengths.

Other Files :

[How Many Lines Of Symmetry Does An Isosceles Trapezoid Have, 1. How Many Lines Of Symmetry Does The Isosceles Trapezoid Have, 1. How Many Lines Of Symmetry Does The Isosceles Trapezoid Have \(1 Point\), How Many Lines Of Reflectional Symmetry Does The Trapezoid Have The Figure Is An Isosceles Trapezoid, How Many Lines Of Symmetry Does An Isosceles Trapezium Have, How Much Lines Of Symmetry Does An Isosceles Trapezoid Have, How Many Lines Of Reflectional Symmetry Does An Isosceles Trapezoid Have, How Many Lines Of Symmetry Will An Isosceles Trapezium Have, How Much Lines Of Symmetry Does An Isosceles Trapezium Have, How Many Lines Of Symmetry Does An Isosceles Trapezium Has,](#)